


Was kosten die Sachen?




Lösungen finden durch Berechnen der Einzelpreise

1


Was kosten die Sachen?




8 €




14 €

 = ___ €


 = ___ €

2


Was kosten die Sachen?




17 €



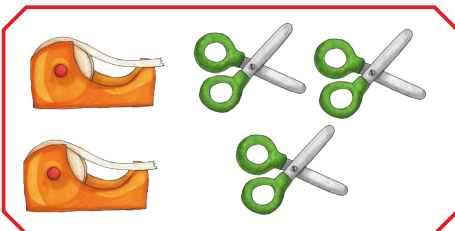
18 €

 = ___ €


 = ___ €

3


Was kosten die Sachen?




16 €



11 €

 = ___ €

 = ___ €

4

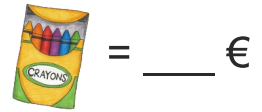
Was kosten die Sachen?



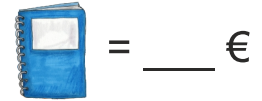
18 €



14 €



= ___ €




= ___ €


www.mathemonsterchen.de

5

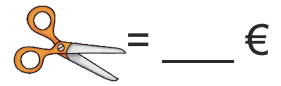
Was kosten die Sachen?



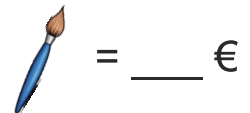
13 €



10 €



= ___ €

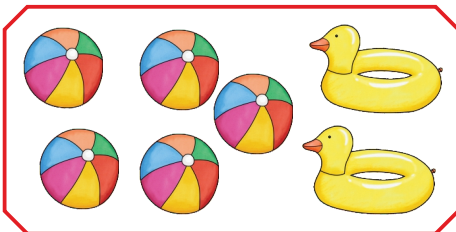


= ___ €

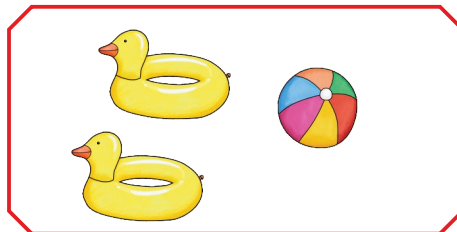
www.mathemonsterchen.de

6

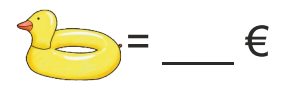
Was kosten die Sachen?



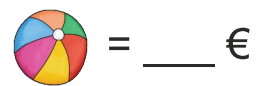
25 €



13 €



= ___ €

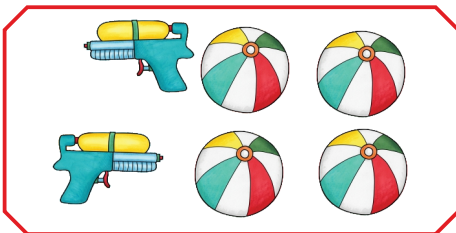


= ___ €

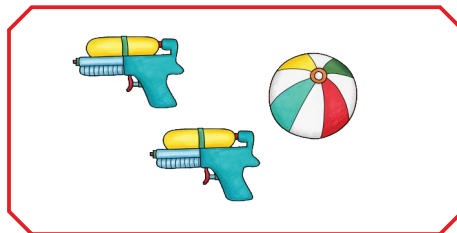
www.mathemonsterchen.de

7

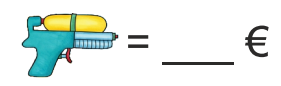
Was kosten die Sachen?



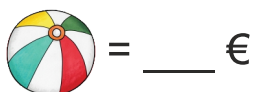
26 €



17 €



= ___ €




= ___ €


www.mathemonsterchen.de

8

Was kosten die Sachen?



21 €



15 €


$$\text{Boat} = \underline{\quad} \text{ €}$$

$$\text{Duck} = \underline{\quad} \text{ €}$$

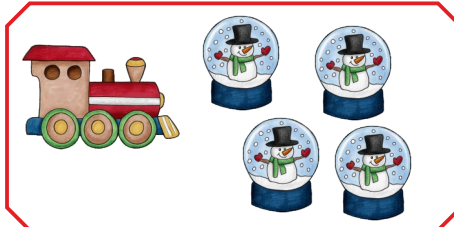
www.mathemonsterchen.de

9

Was kosten die Sachen?



24 €



18 €

$$\text{Snow globe} = \underline{\quad} \text{ €}$$

$$\text{Train} = \underline{\quad} \text{ €}$$

www.mathemonsterchen.de

10

Was kosten die Sachen?



26 €



18 €

$$\text{Bucket} = \underline{\quad} \text{ €}$$

$$\text{Shovel} = \underline{\quad} \text{ €}$$

www.mathemonsterchen.de

11

Was kosten die Sachen?



43 €



29 €


$$\text{Jack} = \underline{\quad} \text{ €}$$

$$\text{Spinning top} = \underline{\quad} \text{ €}$$


www.mathemonsterchen.de

12


Was kosten die Sachen?




66 €




42 €

 = ___ €

 = ___ €

13


Was kosten die Sachen?




98 €



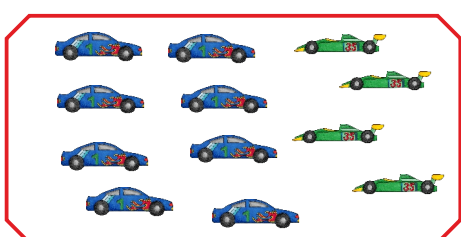
58 €

 = ___ €

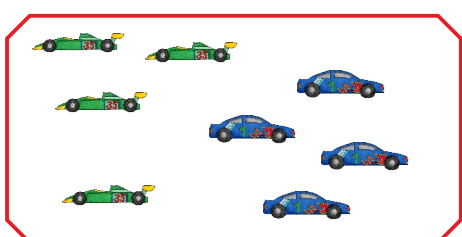
 = ___ €

14


Was kosten die Sachen?



100 €




64 €

 = ___ €


 = ___ €

15


Was kosten die Sachen?




90 €
































66 €

 = ___ €

 = ___ €

Lösungen:

<p>1</p>  = <u>1</u> €  = <u>6</u> €	<p>2</p>  = <u>8</u> €  = <u>1</u> €	<p>3</p>  = <u>2</u> €  = <u>5</u> €	<p>4</p>  = <u>4</u> €  = <u>2</u> €
<p>5</p>  = <u>3</u> €  = <u>1</u> €	<p>6</p>  = <u>5</u> €  = <u>3</u> €	<p>7</p>  = <u>7</u> €  = <u>3</u> €	<p>8</p>  = <u>6</u> €  = <u>3</u> €
<p>9</p>  = <u>3</u> €  = <u>6</u> €	<p>10</p>  = <u>4</u> €  = <u>2</u> €	<p>11</p>  = <u>7</u> €  = <u>5</u> €	<p>12</p>  = <u>8</u> €  = <u>9</u> €
<p>13</p>  = <u>10</u> €  = <u>9</u> €	<p>14</p>  = <u>9</u> €  = <u>7</u> €	<p>15</p>  = <u>14</u> €  = <u>12</u> €	